


























Name _____


Score: _____

The Cups Carving Contest

Rick, Joy, Rincy, and John were in a cup carving contest.
There was a prize for the person who carved the most cups.

Number of Cups Carved

Rick	      
Joy	    
Rincy	    
John	       

 = 2 cups

- How many cups did Rincy carve? _____
- How many cups did Rick carve? _____
- How many cups did John carve? _____
- How many cups did Joy carve? _____
- How many more cups did Rincy carve than Joy? _____
- How many cups did Joy and John. carve in all? _____
- Which person carved the greatest number of cups? _____
- Which person carved the least number of cups? _____
- If Joy carved 4 more cups, how many cups would he have carved in all? _____
- If Rick had carved 6 fewer cups, how many would he has carved? _____
- How many more cups did Rick carve than Rincy? _____
- How many cups did the 4 contestants carve altogether? _____



























Name _____


Score: _____

The Cups Carving Contest

Rick, Joy, Rincy, and John were in a cup carving contest.
There was a prize for the person who carved the most cups.

Number of Cups Carved

Rick								
Joy								
Rincy								
John								

 = 2 cups

- How many cups did Rincy carve? **11 cups**
- How many cups did Rick carve? **13 cups**
- How many cups did John carve? **16 cups**
- How many cups did Joy carve? **10 cups**
- How many more cups did Rincy carve than Joy? **1 cups**
- How many cups did Joy and John carve in all? **26 cups**
- Which person carved the greatest number of cups? **John**
- Which person carved the least number of cups? **Joy**
- If Joy carved 4 more cups, how many cups would he have carved in all? **18 cups**
- If Rick had carved 6 fewer cups, how many would he has carved? **1 cups**
- How many more cups did Rick carve than Rincy? **2 cups**
- How many cups did the 4 contestants carve altogether? **50 cups**